

Paper copy of 2018 International Practice Exam MCQ

1. Which of the following methods best limits the influence of unknown variables in an experiment?
- (A) Random assignment ✓
- (B) Correlational study
- (C) Debriefing
- (D) Stratified sampling
- (E) Subject matching
2. Marissa is a good tennis player whose performance seems to improve as the crowd watching her gets larger. The best explanation for this phenomenon is
- (A) the bystander effect
- (B) misattribution
- (C) social facilitation ✓
- (D) a social schema
- (E) the self-serving bias
3. Sheila has a favorite book that she enjoys so much she has read it several times. This book is now assigned in her literature class, and students receive gift certificates for each chapter they read. As the class progresses through the book, Sheila finds she enjoys it less. This illustrates
- (A) overjustification ✓
- (B) anchoring and adjustment
- (C) habituation
- (D) extinction
- (E) cognitive dissonance
4. A patient with symptoms of depression is working with a psychologist and reports that he has no meaningful relationships and no skills that allow him to make friends. The psychologist determines that the patient's beliefs and lack of interpersonal skills are the primary contributors to his depression. Which of the following treatments is the psychologist most likely to use?
- (A) Cognitive-behavioral therapy ✓
- (B) Electroconvulsive therapy (ECT)
- (C) Psychoanalysis
- (D) Repetitive transcranial magnetic stimulation (RTMS)
- (E) Antidepressant medications
5. Dr. Lee is interested in the effect of lighting on people's ability to concentrate. Dr. Lee studies this by manipulating the amount of lighting while participants read and then measuring their scores on a reading comprehension test. Group 1 receives dim light, and group 2 receives bright light. Which of the following research methods is Dr. Lee using?

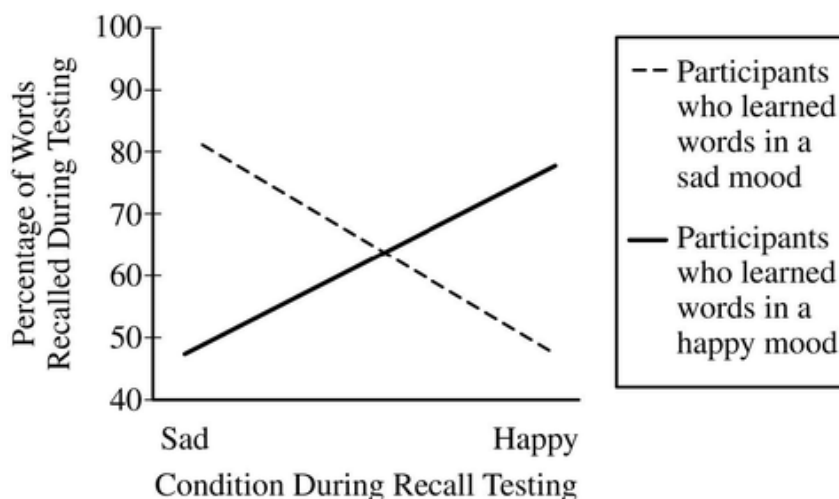
Paper copy of 2018 International Practice Exam MCQ

- (A) A case study
(B) A survey
(C) A correlational study
(D) An experiment ✓
(E) A simulation
6. Psychodynamic therapy has its roots in the theories of
- (A) Sigmund Freud ✓
(B) B. F. Skinner
(C) Abraham Maslow
(D) Carl Rogers
(E) John B. Watson
7. Which of the following is an example of a compulsion?
- (A) Having uncontrollable thoughts
(B) Having frequent daydreams
(C) Checking the doors twenty times before going to bed ✓
(D) Refusing to leave the home because of worry about having a panic attack
(E) Believing that aliens are stealing thoughts
8. Samuel became ill after eating pepperoni pizza and refuses to eat it now. However, he still enjoys plain pizza. Samuel's eating behavior illustrates
- (A) negative reinforcement
(B) discrimination ✓
(C) shaping
(D) generalization
(E) chaining
9. According to social psychologists, which of the following characteristics makes two people LEAST likely to develop a lasting romantic relationship?
- (A) Having very different personalities ✓
(B) Being in four classes and three extracurricular clubs together
(C) Living on the same floor in a college dorm
(D) Being highly attracted to each other
(E) Having similar levels of physical attractiveness
10. Which of the following describes the correct order of information processing in vision?

Paper copy of 2018 International Practice Exam MCQ

- (A) Bipolar cells→rods and cones→ganglion cells→optic nerve
 (B) Optic nerve→rods and cones→bipolar cells→ganglion cells
 (C) Rods and cones→bipolar cells→ganglion cells→optic nerve ✓
 (D) Ganglion cells→bipolar cells→rods and cones→optic nerve
 (E) Rods and cones→ganglion cells→bipolar cells→optic nerve

11.



In an experiment, either a sad video or a happy video was shown to participants to influence their moods. The participants were then asked to memorize a list of words. Later, the participants were again shown either the same video they had seen before memorizing the words or they were shown the other video, and they were then asked to recall the words they had memorized previously. The results of the experiment, summarized in the chart above, best illustrate which psychological concept?

- (A) Episodic memory
 (B) State-dependent memory ✓
 (C) Latent learning
 (D) Observational learning
 (E) Encoding failure

12. The brain's ability to adapt after it is damaged is known as

- (A) integration
 (B) plasticity ✓
 (C) polarization
 (D) lateralization
 (E) specificity

13. Which of the following measures can be precisely located on the graph of a skewed distribution without doing any calculations?

Paper copy of 2018 International Practice Exam MCQ

(A) Mode



(B) Median

(C) Mean

(D) Standard deviation

(E) Variance

14. Bailey and Marcus packed everything they thought they would need for a weekend camping trip. When it rained and they realized they had not brought rain gear, Bailey said, "I knew we should have packed raincoats!" Bailey's thinking illustrates which of the following concepts?

(A) An algorithm

(B) A flashbulb memory

(C) Hindsight bias



(D) The representativeness heuristic

(E) Prospective memory

15. Michael states that his friend Scott is cheap. Michael does not realize he himself is cheap. If Scott is not cheap, which of the following defense mechanisms is Michael using?

(A) Regression

(B) Displacement

(C) Identification

(D) Projection



(E) Reaction formation

16. Using a mathematical formula to find the solution to a problem is an example of

(A) elaborative rehearsal

(B) a means-end analysis

(C) insight

(D) an algorithm



(E) divergent thinking

17. It is important for researchers to use precise operational definitions when

(A) they want to ensure that conditions are assigned randomly

(B) they want to be able to replicate the experiment



(C) they want to organize the hypotheses appropriately

(D) they are conducting experimental research but not correlational research

(E) they are conducting an experiment with no independent and dependent variables

Paper copy of 2018 International Practice Exam MCQ

18. Research participants are randomly assigned to one of three groups. One group listens to a list of words, another group reads a list of words printed on paper, and the remaining group hears and reads the words. The researcher then tests the participants' memories to see how many words the members of each group can recall. The modality in which the words are presented (i.e., auditory, visual, or both) is which type of variable?
- (A) Confounding
 - (B) Dependent
 - (C) Independent ✓
 - (D) Extraneous
 - (E) Control
19. The utterance “likes dog my swim to” does not sound correct because it violates the rules of
- (A) lexicon
 - (B) prosody
 - (C) syntax ✓
 - (D) fast mapping
 - (E) morphemes
20. Which of the following are involved in regulating circadian rhythms?
- (A) Prefrontal cortex, occipital lobe, cerebellum
 - (B) Photoreceptors, hypothalamus, pineal gland ✓
 - (C) Proprioceptors, thalamus, somatosensory cortex
 - (D) Medulla, thalamus, pituitary gland
 - (E) Cerebral cortex, motor cortex, adrenal glands
21. Which of the following treatments would reduce a drinker's dependence on alcohol by changing the positive effect of alcohol to a negative one?
- (A) Systematic desensitization
 - (B) Insight therapy
 - (C) Aversive conditioning ✓
 - (D) Psychoanalysis
 - (E) A token economy
22. When Betty lost her job, she kept returning to work each morning because she did not remember that she had been fired. She saw a doctor, who found no brain injury or other neurological condition that would prevent her from remembering. Which psychological disorder is Betty most likely experiencing?

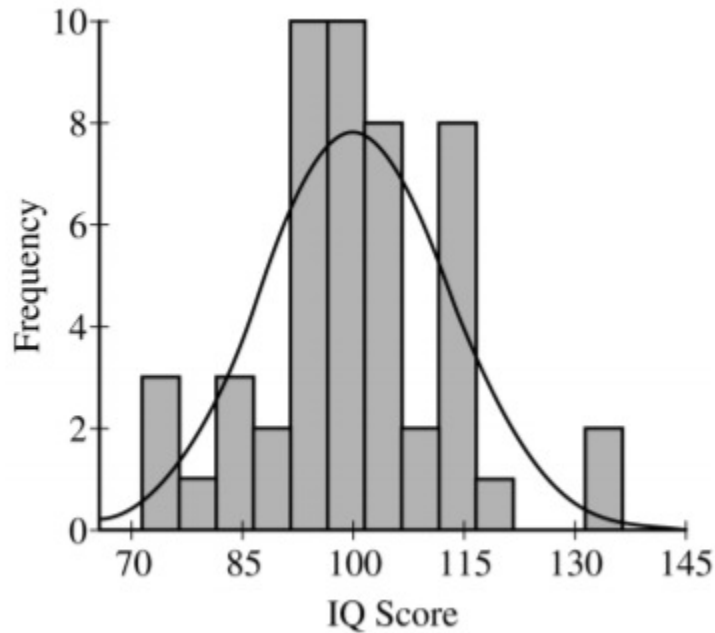
Paper copy of 2018 International Practice Exam MCQ

- (A) Bipolar disorder
(B) Schizophrenia
(C) Obsessive-compulsive disorder
(D) Dissociative amnesia ✓
(E) Antisocial personality disorder
23. Damage to Wernicke's area is most likely to be associated with difficulty in
(A) tasting
(B) hearing
(C) seeing
(D) understanding language ✓
(E) moving arms and legs
24. Which of the following is most likely to be used as evidence against the concept of g ?
(A) Mental age
(B) Standardization
(C) Insight
(D) Savant syndrome ✓
(E) Imprinting
25. According to the diathesis-stress model of schizophrenia, which of the following is true of a person with a genetic predisposition for developing schizophrenia?
(A) The person will definitely develop and show the disorder.
(B) The person has a mother who has been diagnosed with schizophrenia.
(C) The person will develop symptoms of the disorder during young adulthood.
(D) The person has a high level of dopamine activity.
(E) The person has an increased likelihood of developing the disorder during a period of major life changes. ✓
26. Nick is smiling even though he does not feel happy. After a short time he feels happier. The best explanation for Nick's change in mood is
(A) justification of effort
(B) facial feedback ✓
(C) bottom-up processing
(D) selective encoding
(E) homeostasis
27. Children of authoritative parents tend to be

Paper copy of 2018 International Practice Exam MCQ

- (A) immature
 (B) indecisive
 (C) independent ✓
 (D) withdrawn
 (E) aggressive

28.



A psychologist administered the most recent edition of the Stanford-Binet IQ test to 50 students and their scores are shown in the chart above. How many students earned scores higher than two standard deviations above the mean?

- (A) 2 ✓
 (B) 3
 (C) 8
 (D) 10
 (E) 20

Question is based on the following.

Karl goes to see Dr. Norton to help him overcome his fear of cats. Karl's fear began in childhood when he petted a cat and someone slammed a door. Every time Karl petted the cat, the door slammed. Now whenever Karl sees a cat, he becomes very anxious.

29. Karl's fear of cats is classified as

Paper copy of 2018 International Practice Exam MCQ

- (A) obsessive-compulsive disorder
- (B) panic disorder
- (C) a specific phobia
- (D) generalized anxiety disorder
- (E) conversion disorder



30. In the development of Karl's fear of cats, what was the unconditioned stimulus (UCS) ?

- (A) Fear
- (B) The cat
- (C) The slamming of the door
- (D) The person who slammed the door
- (E) The room in which the door slamming took place



31. Dr. Norton puts a cat in the room with Karl and prevents Karl from avoiding or escaping the cat until Karl's anxiety naturally dissipates. The treatment is called

- (A) systematic desensitization
- (B) participant modeling
- (C) aversion therapy
- (D) counterconditioning

(E) flooding



32. Karl may have been reluctant to try therapy to change his fear because he believes that his efforts to change are ineffective. This would indicate that Karl has low

- (A) self-esteem
- (B) self-regulation
- (C) self-perception

(D) self-efficacy

(E) self-concept



33. Which of the following scenarios best exemplifies practical intelligence as suggested by Robert Sternberg's triarchic theory?

- (A) A child becomes an accomplished dancer.
- (B) A student achieves high scores on the math and language portions of a standardized exam.

(C) A club president devises a way to publicize important upcoming events.

(D) A student composes a new song.

(E) A child has few social skills but an unusually strong memory.



Paper copy of 2018 International Practice Exam MCQ

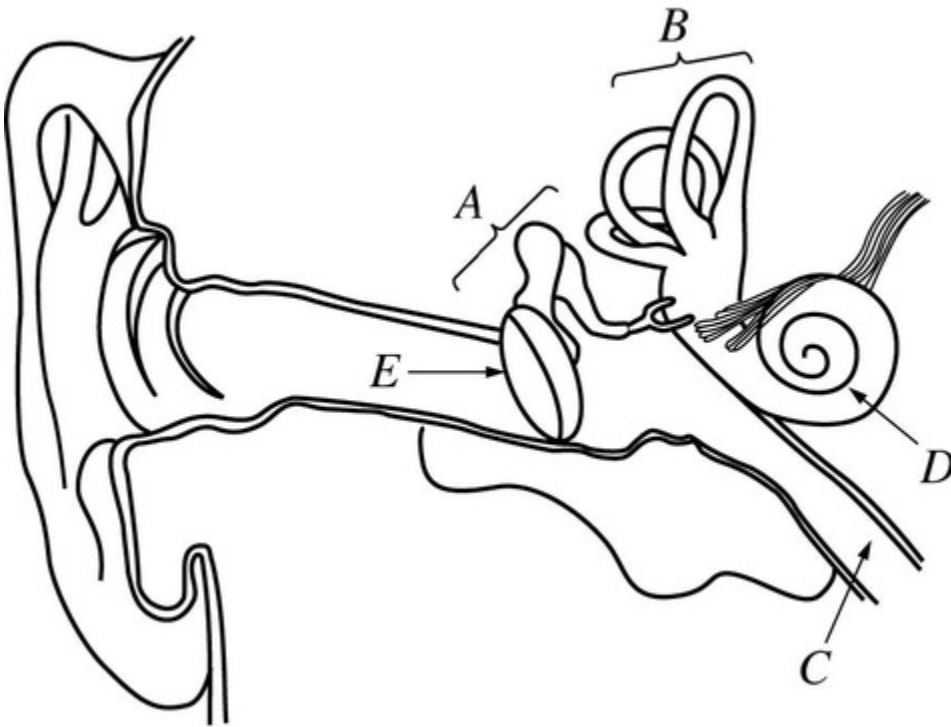
34. Which of the following is NOT a product of learning?
- (A) Slowing down to avoid getting a ticket
 - (B) Squinting in bright light ✓
 - (C) Doing chores in order to receive money
 - (D) Getting acclimated to the frequent sound of trains going past one's house
 - (E) Becoming afraid of dogs after being bitten by a dog
35. The process of converting incoming physical energy into a neural code that can be processed is called
- (A) transduction ✓
 - (B) sensory threshold
 - (C) sensory adaptation
 - (D) parallel processing
 - (E) transferred excitation
36. Jorgas struggles with meeting new people. He is very shy and does not approach people at social events. Because of this, people assume he does not want to talk to them and they avoid him, which in turn reinforces Jorgas' anxiety about approaching people. Jorgas' situation illustrates which of the following principles?
- (A) Locus of control
 - (B) Reciprocal determinism ✓
 - (C) Implicit personality theory
 - (D) Learned helplessness
 - (E) Modeling
37. The type of intelligence that Howard Gardner described as individuals' abilities to understand themselves and to be aware of their talents and limitations is
- (A) naturalistic
 - (B) interpersonal
 - (C) kinesthetic
 - (D) intrapersonal ✓
 - (E) g
38. Janie is successful with word games that require her to create words out of a series of letters. Which of the following combinations most likely contributes to her success?

Paper copy of 2018 International Practice Exam MCQ

- (A) Linguistic intelligence and a mental set
- (B) Linguistic intelligence and heuristics ✓
- (C) Spatial intelligence and functional fixedness
- (D) Spatial intelligence and heuristics
- (E) Spatial intelligence and a mental set
- 39.** Steve's cat used to run away from loud music. Over time the cat stopped running away from the sound. Which of the following processes has occurred?
- (A) Classical conditioning
- (B) Habituation ✓
- (C) Generalization
- (D) Operant conditioning
- (E) Sensitization
- 40.** The Barnum effect in psychological assessment refers to
- (A) when there is insufficient statistical support to confirm a test's reliability
- (B) the tendency of individuals to accept vague personality descriptions as accurate ✓
- (C) when an interviewee demonstrates a consistently negative response set
- (D) the influence of an interviewer's personal bias on the outcome of an interview
- (E) the influence of distracting test conditions on a test taker's performance

Paper copy of 2018 International Practice Exam MCQ

Question is based on the following.



41. Which of the following structures is part of the vestibular system?

(A) *A*

(B) *B*

(C) *C*

(D) *D*

(E) *E*



42. The area labeled A contains the

(A) auditory nerves

(B) pinna

(C) ossicles

(D) cochlea

(E) semi-circular canals



43. Jack performed well on the most recent math test. When asked why he performed well, Jack said it was because of his high level of ability. Jerry performed poorly on the same test. When asked why, Jerry said that the test was unfair. These attitudes illustrate

Paper copy of 2018 International Practice Exam MCQ

(A) the self-serving bias ✓

(B) self-efficacy

(C) learned helplessness

(D) the fundamental attribution error

(E) role-playing

44. During her psychotherapy sessions, Justine finds that her therapist often paraphrases what she has said, asks for clarification, and seems to understand her feelings. The therapist's approach is most consistent with that of

(A) Carl Rogers ✓

(B) Sigmund Freud

(C) Albert Ellis

(D) Erik Erikson

(E) Fritz Perls

45. In the 1800s, the activist Dorothea Dix led a movement in support of

(A) using introspection as a therapeutic procedure

(B) eliminating the policy of deinstitutionalization

(C) adopting the belief that mental disorders occur when people fail to conform to society's expectations

(D) outlawing the practice of surgical lobotomy

(E) improving the treatment of patients with mental disorders who were housed in asylums ✓

46. Which of the following regions of the body has the largest area of sensory cortex devoted to it?

(A) Trunk

(B) Arm

(C) Shoulder

(D) Leg

(E) Face ✓

47. Dora alternates between periods of extreme euphoria, when she is very talkative, overconfident, and hyperactive, and times of profound sadness, when she experiences feelings of hopelessness. Which of the following disorders is Dora most likely exhibiting?

(A) Borderline personality

(B) Major depressive

(C) Bipolar ✓

(D) Generalized anxiety

(E) Schizophrenia

Paper copy of 2018 International Practice Exam MCQ

48. A four-year-old child frequently pulled on the dog's tail to gain attention. To reduce this undesirable behavior, the parent took away one hour of television viewing every time the child pulled the dog's tail. Within one week, the undesirable behavior was significantly reduced. The above scenario illustrates
- (A) positive reinforcement
 - (B) negative reinforcement
 - (C) negative punishment
 - (D) positive punishment
 - (E) extinction
49. Even though Eli prefers romantic comedy movies, he often goes to action-adventure movies to fit in with his friends. Eli's behavior can best be explained by
- (A) the reciprocity norm
 - (B) obedience
 - (C) normative social influence
 - (D) informational social influence
 - (E) companionate love
50. The network of structures involved in emotion, motivation, and memory is the
- (A) limbic system
 - (B) pons
 - (C) corpus callosum
 - (D) occipital lobe
 - (E) parietal lobe
51. Initially, intelligence quotients were calculated on the basis of a person's mental and chronological ages. Using that approach, a person with a mental age of 12 and an intelligence score of 120 would have a chronological age of
- (A) 10
 - (B) 12
 - (C) 14
 - (D) 16
 - (E) 18
52. Which of the following neurotransmitters is most closely associated with schizophrenia?

Paper copy of 2018 International Practice Exam MCQ

- (A) Norepinephrine
- (B) Acetylcholine
- (C) Glutamate
- (D) Dopamine ✓
- (E) Serotonin

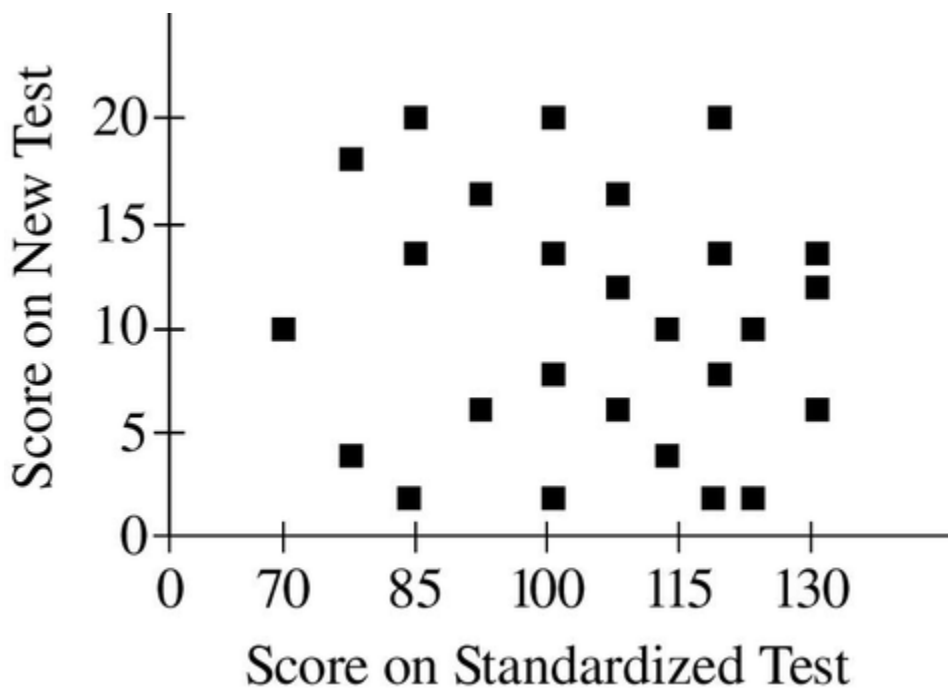
53. Which of the following structures is most closely associated with communication between the central nervous system and the endocrine system?

- (A) Cerebellum
- (B) Amygdala
- (C) Medulla
- (D) Reticular activating system

(E) Hypothalamus ✓

Question is based on the following.

A group of psychologists wanted to develop an intelligence test that would be quicker to administer than the one they were using, which was a standardized test that required answering as many questions correctly as possible in a given time. The existing test was considered valid and reliable. In the psychologists' new test, participants had to find an image hidden in a visual display as quickly as possible. The psychologists collected data to determine the relation between the number of items the participants answered correctly on the original standardized test and the time it took them to spot the hidden image on the new test. The graph below displays the results.



Paper copy of 2018 International Practice Exam MCQ

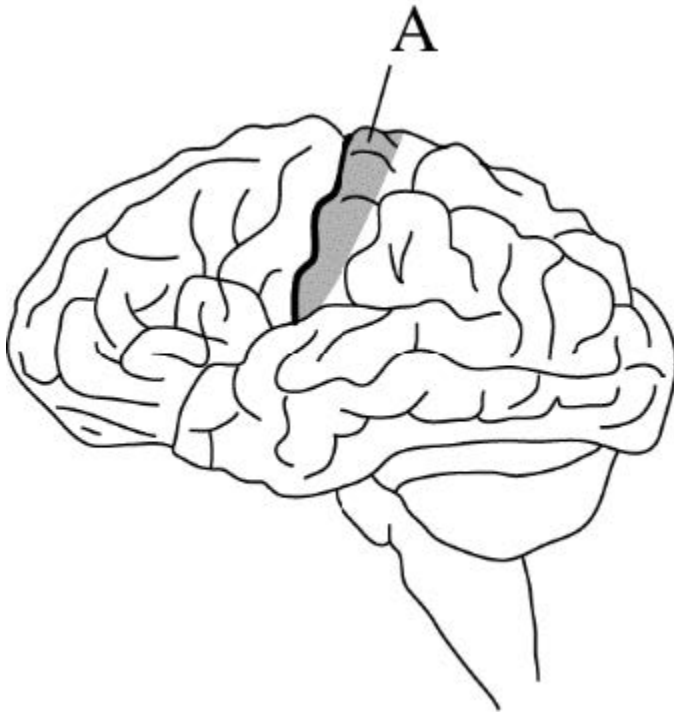
54. Based on the graph, which of the following would most likely be used to assess the relation between the participants' scores on the two tests?
- (A) A t test
 - (B) A correlation ✓
 - (C) Analysis of variance
 - (D) Descriptive statistics
 - (E) Factor analysis
55. Which of the following values best represents the value of the statistic associated with the graph?
- (A) -0.50
 - (B) 0.00 ✓
 - (C) 1.00
 - (D) 1.96
 - (E) 3.00
-
56. Which of the following is a valid conclusion that the researchers could have drawn from the data?
- (A) The measurement from the new test is likely to be better than the measurement from the original test.
 - (B) The new test provides information on intelligence that is highly comparable to that provided by the original test.
 - (C) The new test produces scores that are generally unrelated to those produced by the original test. ✓
 - (D) The new test is likely to be biased in favor of disadvantaged groups.
 - (E) Intelligence is too abstract a concept to measure accurately.
57. Which of the following perspectives suggests that depression is due to the unconscious conflicts and hostile feelings that originate in early childhood?
- (A) Biological
 - (B) Behavioral
 - (C) Psychoanalytic ✓
 - (D) Cognitive
 - (E) Sociocultural
58. Which of the following is a disease in which the immune system attacks the myelin of neurons in the central nervous system?

Paper copy of 2018 International Practice Exam MCQ

- (A) Parkinson's disease
- (B) Multiple sclerosis
- (C) Schizophrenia
- (D) Epilepsy
- (E) Rett syndrome



59.



Which part of the brain represented above is indicated by A?

- (A) Cerebellum
- (B) Prefrontal cortex
- (C) Somatosensory cortex
- (D) Wernicke's area
- (E) Broca's area



60. Isaac's father offers to give him five dollars for every good grade he earns on his report card. Which of the following is a type of motivation being used by Isaac's father?

- (A) Drive reduction
- (B) Instinct
- (C) Intrinsic
- (D) Incentive
- (E) Humanistic



Paper copy of 2018 International Practice Exam MCQ

61. During the high-wire act, Grace walks along a rope suspended 30 feet above the circus floor. Which of the following is most involved in helping Grace coordinate her movements and maintain her balance during the performance?
- (A) Cerebellum ✓
- (B) Hypothalamus
- (C) Hippocampus
- (D) Sympathetic nervous system
- (E) Parasympathetic nervous system
62. Of the following, which would most commonly be used to treat a phobia?
- (A) Antipsychotic medication
- (B) Aversive conditioning
- (C) Systematic desensitization ✓
- (D) Token economy
- (E) Group therapy
63. Which of the following psychological approaches suggests that jealousy might serve an adaptive function in protecting a sexual relationship from threats?
- (A) Cognitive
- (B) Behavioral
- (C) Psychodynamic
- (D) Evolutionary ✓
- (E) Humanistic
64. Laura is in transition from Erik Erikson's industry versus inferiority stage into the identity versus role confusion stage. Which of the following is most likely what Laura is experiencing?
- (A) She is less affected by self-esteem and more interested in initiative.
- (B) She is more concerned with autonomy than feelings of guilt.
- (C) She is less interested in accomplishing things and more interested in defining herself. ✓
- (D) She is more affected by matters of trust and is not spending much time thinking, "Am I good or bad?"
- (E) She is more interested in doing things for herself than relying on others.
65. After listening to a radio station play the same set of songs every three hours, Ivan grows to like them. Ivan's reaction can be best explained by

Paper copy of 2018 International Practice Exam MCQ

- (A) frequency theory
- (B) functional fixedness
- (C) the central route to persuasion
- (D) the mere-exposure effect
- (E) the phi phenomenon

**Question is based on the following.**

In a two-phase study, participants were randomly assigned to either group A or group B. All participants were subjected to a series of irritating air puffs directed at the face. In the first phase of the study, participants in group A pressed a button that stopped the air puffs. Participants in group B pressed a button that had no effect on the air puffs. In the second phase of the study, both groups had buttons that, if pressed, would stop the air puffs.

66. The study most directly explores the concept of

- (A) learned helplessness
- (B) social facilitation
- (C) retrograde amnesia
- (D) the mere-exposure effect
- (E) regression to the mean



67. Which of the following disorders is hypothesized to result most frequently from real-world conditions that are similar to those used in the study?

- (A) Autism spectrum
- (B) Bipolar
- (C) Dependent personality
- (D) Major depressive
- (E) Obsessive-compulsive



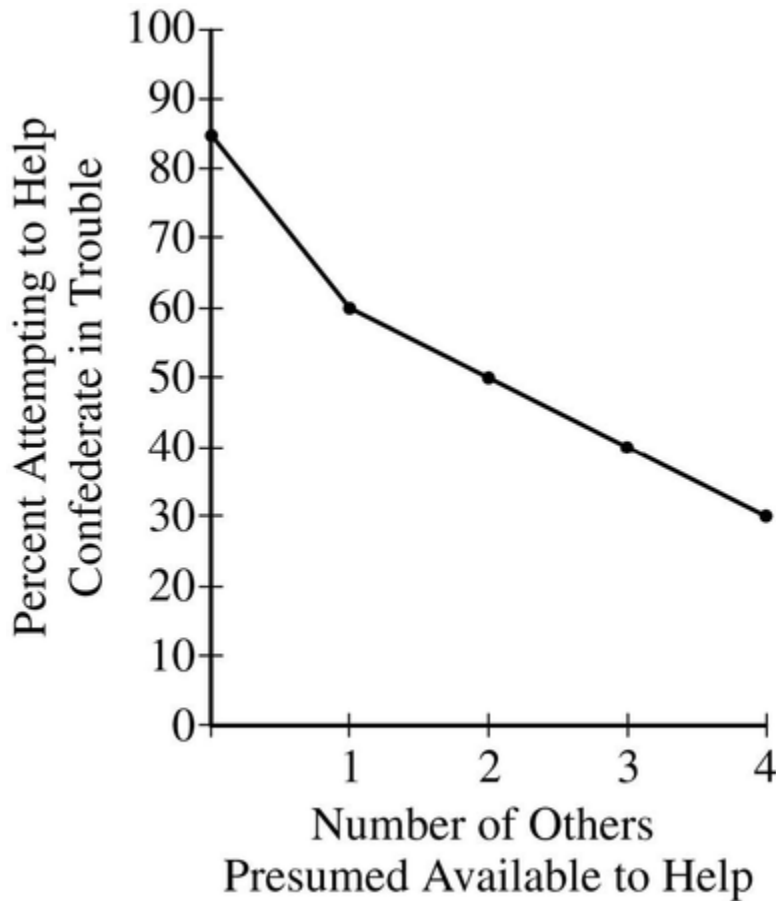
68. In order to get more audience participation, a radio show offers a prize to the first person to call the show at the beginning of every hour. The show is using which of the following schedules of reinforcement?

- (A) Continuous
- (B) Fixed ratio
- (C) Fixed interval
- (D) Variable ratio
- (E) Variable interval



Paper copy of 2018 International Practice Exam MCQ

69.



The above diagram illustrates which of the following psychological concepts?

- (A) Fundamental attribution error
- (B) Reciprocity norm
- (C) Deindividuation
- (D) Social trap

(E) Bystander effect



70. The Thematic Apperception Test (TAT) is based on the hypothesis that when a person interprets an ambiguous picture, that person is

- (A) expressing unique sensory processes
- (B) generating objective measurements that are more effective than subjective measures in assessing personality

(C) projecting an internal psychological state onto an external stimulus



- (D) showing the effects of patterns of positive and negative reinforcement
- (E) providing information regarding one's own level of creativity

71. Harry Harlow's experiments with rhesus monkeys and surrogate mothers demonstrate the importance of

Paper copy of 2018 International Practice Exam MCQ

- (A) socialization to neural development
- (B) environmental stimulation to cognitive development

(C) contact comfort to attachment ✓

- (D) imprinting to observational learning
- (E) instincts to reproductive habits

72. Denny does not have wrapping paper to use to wrap a birthday present, and so he decides to use colorful newspaper comics instead. Denny's solution demonstrates that he has overcome

(A) functional fixedness ✓

- (B) the fundamental attribution error
- (C) cognitive dissonance
- (D) egocentrism
- (E) a self-serving bias

73. The fovea has the greatest visual acuity in bright light primarily because the fovea is

- (A) near the center of the visual field
- (B) close to the lens
- (C) not close to the blind spot
- (D) an extension of the frontal lobe

(E) made up of only cones ✓

74. When Amy was seven years of age, she had a babysitter from France. During this time Amy learned to speak a little French. Years later, when Amy got to college, she signed up for a beginning French class. Amy learned the material in her French class much more quickly than her classmates did. Amy's rapid learning was most likely due to

(A) implicit memory ✓

- (B) episodic memory
- (C) spontaneous recovery
- (D) deductive reasoning
- (E) fluid intelligence

75. After Sharon stares at a patch of saturated green color for a brief period of time, she looks at a white surface and sees a red patch of color. This perceptual phenomenon is best explained by

- (A) retinal disparity
- (B) color constancy
- (C) selective attention
- (D) trichromatic theory

(E) opponent-process theory ✓

Paper copy of 2018 International Practice Exam MCQ

76. Which of the following relates most to the lowest level of Abraham Maslow's hierarchy of needs?
- (A) Social affiliation
 - (B) Self-actualization
 - (C) Fight-or-flight response
 - (D) Intrinsic motivation
 - (E) Drive reduction ✓
77. A common psychological effect of alcohol intake is
- (A) reduced inhibition ✓
 - (B) anxiety
 - (C) enhanced memory
 - (D) psychosis
 - (E) heightened creativity
78. A child whose family owns a dog may refer to any four-legged animal as "dog." In learning theory, such behavior is known as
- (A) stimulus generalization ✓
 - (B) operant conditioning
 - (C) classical conditioning
 - (D) ecological validity
 - (E) shaping
79. Which of the following is an individual more likely to do when working in a group?
- (A) Provide needed help to a stranger
 - (B) Increase effort on a project
 - (C) Endorse an opinion with low popularity among group members
 - (D) Make a cautious, low-risk decision
 - (E) Show a decline in work output ✓
80. A 40-year-old man and his 7-year-old son move to a country where they have to learn a new language. Compared with his son, the 40-year-old man will
- (A) have more difficulty learning to produce phonemes that do not exist in his native language ✓
 - (B) require less active processing to acquire the syntax of the new language
 - (C) overregularize more often
 - (D) learn the grammar of the new language more slowly but ultimately acquire the language better
 - (E) learn new vocabulary at a faster rate by using techniques such as fast mapping

Paper copy of 2018 International Practice Exam MCQ

81. Lisa is a college English major. She believes all math majors are analytical, logical, and serious. Lisa seems to be demonstrating
- (A) group polarization
 - (B) ingroup bias
 - (C) the actor-observer effect
 - (D) outgroup homogeneity bias ✓
 - (E) stereotype threat
82. Because he is afraid of public speaking, Scott withdraws from a class that requires an oral presentation and enrolls in another class without a presentation requirement. He continues the pattern, switching classes each semester to avoid giving presentations. Scott's behavior has been
- (A) positively reinforced
 - (B) negatively reinforced ✓
 - (C) punished
 - (D) weakened
 - (E) classically conditioned
83. Which of the following behaviors best demonstrates an emotional response associated with the short route from the thalamus to the amygdala, as described by Joseph LeDoux?
- (A) Sherry receives a high score on an exam and jumps up and down in celebration.
 - (B) Miguel jumps up on a chair because he thinks he sees something moving along the wall. When he realizes it was just a dust ball, he gets off the chair. ✓
 - (C) Hannah has seen her mother crying at greeting card commercials, so now Hannah always cries whenever she sees a greeting card commercial.
 - (D) As Charulata approaches her front door, she hears a rustle in the bushes. She sees the tail of a cat sticking out of the bushes, so she calmly walks into the house.
 - (E) While waiting for a concert to begin, the crowd gets rowdy, so Anna joins in the rowdy behavior and begins to shout.
84. Which of the following is the best evidence that social interaction is preprogrammed in humans and does not need to be learned?
- (A) Newborns turn their heads if their cheeks are stroked.
 - (B) Newborns prefer sweet over bitter tastes.
 - (C) Newborns are born with the Moro reflex.
 - (D) Newborns focus longer on pictures of typical faces than on ones that show faces with jumbled features. ✓
 - (E) Newborns' development is proximodistal.
85. Eleven-month-old Jason drops a toy from his crib. He immediately looks over the side of the crib to search for the toy. Jason's behavior demonstrates that he has acquired

Paper copy of 2018 International Practice Exam MCQ

- (A) conservation
(B) habituation
(C) dishabituation
(D) object permanence ✓
(E) a zone of proximal development
86. Melinda went skydiving. As soon as she landed, a handsome man helped her gather her parachute. Melinda's heart was beating quickly and her hands were perspiring. Melinda inferred that she must be attracted to him. Which of the following is a theory of emotion that would best explain the relationship between Melinda's physiological state and her apparent attraction to the man that helped her?
- (A) Cannon-Bard
(B) James-Lange
(C) Arousal
(D) Schachter two-factor ✓
(E) Social exchange
87. The difficulty many people have recalling the details of common objects such as pennies can best be explained by
- (A) interference
(B) memory decay
(C) repression
(D) a lack of encoding ✓
(E) amnesia
88. Four-year-old Craig understands that birds build nests in trees. In his front yard, Craig notices an unusually large nest. He is scared to go near it, fearing that some large bird may attack him. Craig's father explains to him that squirrels also build nests and that the nest in the front yard is that of a squirrel. Craig changes his thinking to now include the fact that squirrels build nests. Jean Piaget would say that Craig's new way of thinking about nests is an example of
- (A) insight
(B) accommodation ✓
(C) an algorithm
(D) a heuristic
(E) conservation
89. Nervousness can result in faster and more shallow breathing as well as a racing heart. This is due to activation of the

Paper copy of 2018 International Practice Exam MCQ

- (A) somatic nervous system
(B) parasympathetic nervous system
(C) sympathetic nervous system ✓
(D) corpus callosum
(E) cerebellum
90. Which of the following brain regions is the part of the cerebral cortex that is most responsible for the processing of visual stimuli?
- (A) Parietal lobe
(B) Temporal lobe
(C) Frontal lobe
(D) Occipital lobe ✓
(E) Medulla
91. In Stanley Milgram's classic studies of obedience, teachers in a staged experiment were instructed to administer shocks to learners when they made mistakes. A large percentage of the teachers obeyed the experimenter and administered strong levels of shock to the learners. When this experiment is described, most people judge the obedient participants to be aggressive, cold, and unappealing, and they fail to recognize the role of social forces in behavior. The mistaken judgment is due to
- (A) deindividuation
(B) the fundamental attribution error ✓
(C) a self-serving bias
(D) groupthink
(E) psychological reactance
92. Petunia experiences distress every time she leaves her house and goes out into a crowd. The most likely diagnosis for her would be which of the following types of disorders?
- (A) Anxiety ✓
(B) Somatic symptom and related
(C) Neurodevelopmental
(D) Schizophrenia spectrum and other psychotic
(E) Personality
93. During a political debate, Candidate A expresses detailed facts on an important issue. Candidate B responds with an emotional appeal on the same issue. Which method of persuasion is each of the candidates using?

Paper copy of 2018 International Practice Exam MCQ

- (A) Candidate A is using the peripheral route, and Candidate B is using the central route.
- (B) Candidate A is using the peripheral route, and Candidate B is using the door-in-the-face technique.
- (C) Candidate A is using the central route, and Candidate B is using the peripheral route. ✓
- (D) Candidate A is using the central route, and Candidate B is using the foot-in-the-door technique.
- (E) Candidate A is using the foot-in-the-door technique, and Candidate B is using the peripheral route.
- 94.** The argument over the relative contributions of heredity and environment in the development of various behaviors and personality traits is known as which of the following controversies?
- (A) Continuous versus discrete
- (B) Nature versus nurture ✓
- (C) Active versus passive
- (D) Critical period versus sensitive period
- (E) Ages versus stages
- 95.** In legal cases, Elizabeth Loftus' research on the misinformation effect is most often used to cast doubt on which of the following?
- (A) The knowledge of expert witnesses
- (B) The judgment of jurors
- (C) The memory of eyewitnesses ✓
- (D) The impartiality of judges
- (E) The intelligence of attorneys
- 96.** While attending a concert, Anthony finds that he can clearly recognize the melody coming from the lead violin above all the other instruments playing in the orchestra, even though the other instruments may be louder. Gestalt psychologists would explain Anthony's ability using the principle of
- (A) figure-ground ✓
- (B) closure
- (C) simplicity
- (D) constancy
- (E) proximity
- 97.** When Joe arrives at the library, he can choose from any of several strategies that might help him find the book he needs. He could examine all the books on every shelf, and be certain that he would eventually find the book he wants, but this strategy would take too long. Joe decides instead to ask a librarian to direct him to the appropriate section of the library. Joe is using

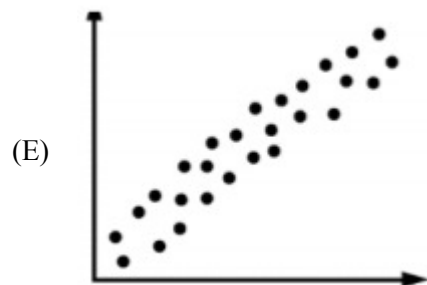
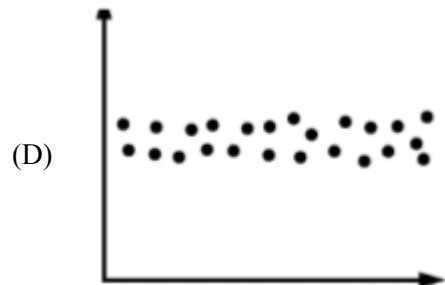

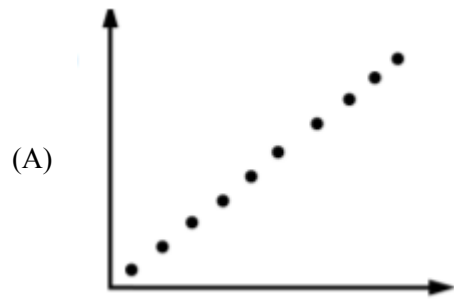
Paper copy of 2018 International Practice Exam MCQ

- (A) fixation
- (B) a mental set
- (C) a prototype
- (D) a heuristic
- (E) an algorithm





98. Which of the following is an example of a strong negative correlation?

Paper copy of 2018 International Practice Exam MCQ



Paper copy of 2018 International Practice Exam MCQ

99. James takes an IQ test when he is in third grade and receives a score of 112. When he is tested again in sixth grade with an alternate version of the same test, his score is 114. The fact that the two scores are very similar most directly indicates that the IQ test is
- (A) valid
 - (B) reliable 
 - (C) biased
 - (D) standardized
 - (E) accurate
100. Which of the following techniques will a person-centered therapist most likely use?
- (A) Systematic desensitization
 - (B) Free association
 - (C) Unconditional positive regard 
 - (D) Dream analysis
 - (E) Rational-emotive behavior therapy